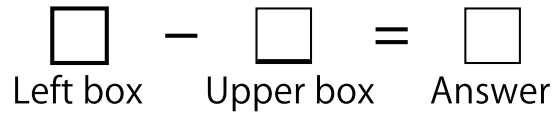


Complete the Subtraction Boxes.



①

-	2	3	4	7	0	8	9	6	1	5
16										

②

-	4	3	1	8	2	9	7	6	5	0
19										

③

-	5	4	7	1	3	2	8	0	9	6
12										

④

-	9	5	4	3	6	2	1	8	7	0
11										

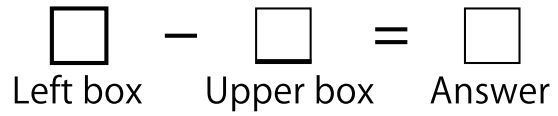
⑤

-	2	0	1	8	9	3	7	4	5	6
17										

Note

Score

Complete the Subtraction Boxes.



①

-	1	9	0	2	3	4	8	7	5	6
17										

②

-	9	8	0	3	7	2	5	1	6	4
12										

③

-	9	3	8	7	0	6	5	2	1	4
14										

④

-	9	4	8	7	2	0	1	5	6	3
15										

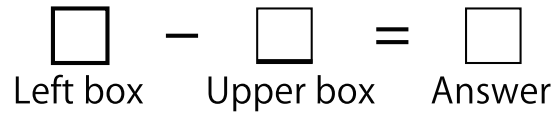
⑤

-	2	4	9	7	0	6	8	5	3	1
11										

Note

Score

Complete the Subtraction Boxes.



①

-	6	0	7	8	2	4	1	5	3	9
15										

②

-	0	1	6	8	3	5	7	2	4	9
19										

③

-	4	9	6	0	3	1	7	8	5	2
13										

④

-	1	6	2	8	9	5	7	4	0	3
17										

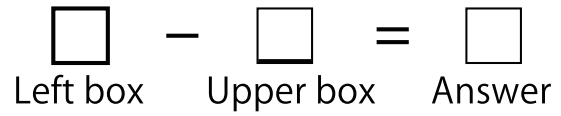
⑤

-	6	7	2	8	0	5	4	9	1	3
16										

Note

Score

Complete the Subtraction Boxes.



①

-	8	6	9	5	2	1	3	4	0	7
12										

②

-	3	4	1	2	9	5	7	0	6	8
14										

③

-	1	0	2	5	9	3	4	6	7	8
19										

④

-	4	6	5	9	7	8	2	3	1	0
18										

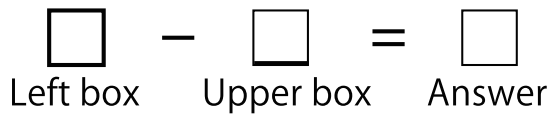
⑤

-	0	6	2	7	5	4	3	8	1	9
13										

Note

Score

Complete the Subtraction Boxes.



①

-	1	6	2	5	7	9	4	0	8	3
14										

②

-	3	9	5	2	4	7	6	8	0	1
19										

③

-	3	5	7	9	4	2	1	8	6	0
15										

④

-	3	1	5	0	8	2	7	4	9	6
12										


⑤

-	8	3	6	1	4	9	2	7	0	5
16										

Note \_\_\_\_\_

Score \_\_\_\_\_

Complete the Subtraction Boxes.



①

-	7	5	8	3	4	9	1	2	6	0
15										

②

-	5	9	3	0	6	4	8	2	1	7
12										

③

-	7	2	1	8	3	6	5	4	0	9
19										

④

-	1	9	3	7	5	0	2	6	8	4
14										

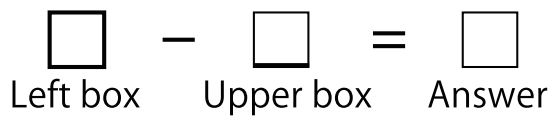
⑤

-	9	5	6	2	1	0	8	4	7	3
18										

Note

Score

Complete the Subtraction Boxes.



①

-	8	3	2	0	9	4	6	1	5	7
13										

②

-	9	3	8	6	4	0	2	1	5	7
19										

③

-	6	9	5	4	1	7	8	3	0	2
16										

④

-	4	1	8	5	9	0	3	6	7	2
12										


⑤

-	7	2	6	3	5	8	0	4	9	1
14										

Note \_\_\_\_\_

Score \_\_\_\_\_

Complete the Subtraction Boxes.



①

-	9	4	1	0	5	8	3	7	6	2
12										

②

-	0	1	6	9	8	3	4	2	5	7
18										

③

-	9	1	7	8	0	4	3	2	5	6
13										

④

-	9	3	4	6	2	1	7	0	8	5
19										

⑤

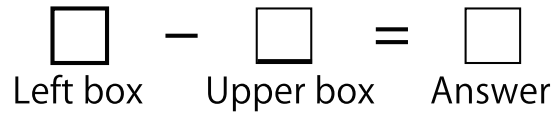
-	1	0	7	5	4	9	3	8	2	6
15										

Note

Score



Complete the Subtraction Boxes.



①

-	8	1	5	0	6	2	4	9	7	3
17										

②

-	9	0	7	4	2	8	6	5	1	3
16										

③

-	0	9	2	6	3	1	7	8	4	5
14										

④

-	2	3	9	1	4	6	0	7	8	5
15										

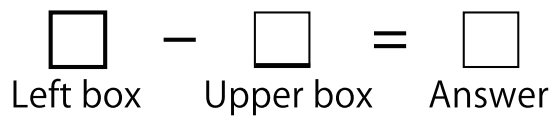
⑤

-	7	9	8	1	3	0	6	4	2	5
19										

Note

Score

Complete the Subtraction Boxes.



①

-	6	5	3	4	8	1	0	9	7	2
11										

②

-	3	7	4	9	5	1	8	6	2	0
19										

③

-	6	0	9	2	3	4	1	7	5	8
16										

④

-	2	9	5	6	8	1	4	0	7	3
18										

⑤

-	9	0	7	5	4	8	2	1	3	6
13										

Note

Score



Complete the Subtraction Boxes.

$$\square - \square = \square$$

Left box                  Upper box                  Answer

①

-	2	3	4	7	0	8	9	6	1	5
16	14	13	12	9	16	8	7	10	15	11

②

-	4	3	1	8	2	9	7	6	5	0
19	15	16	18	11	17	10	12	13	14	19

③

-	5	4	7	1	3	2	8	0	9	6
12	7	8	5	11	9	10	4	12	3	6

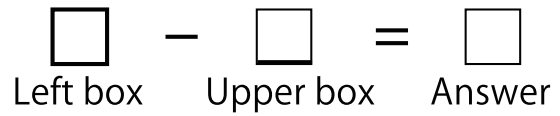
④

-	9	5	4	3	6	2	1	8	7	0
11	2	6	7	8	5	9	10	3	4	11

⑤

-	2	0	1	8	9	3	7	4	5	6
17	15	17	16	9	8	14	10	13	12	11

Complete the Subtraction Boxes.



①

-	1	9	0	2	3	4	8	7	5	6
17	16	8	17	15	14	13	9	10	12	11

②

-	9	8	0	3	7	2	5	1	6	4
12	3	4	12	9	5	10	7	11	6	8

③

-	9	3	8	7	0	6	5	2	1	4
14	5	11	6	7	14	8	9	12	13	10

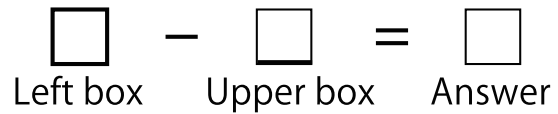
④

-	9	4	8	7	2	0	1	5	6	3
15	6	11	7	8	13	15	14	10	9	12

⑤

-	2	4	9	7	0	6	8	5	3	1
11	9	7	2	4	11	5	3	6	8	10

Complete the Subtraction Boxes.



①

-	6	0	7	8	2	4	1	5	3	9
15	9	15	8	7	13	11	14	10	12	6

②

-	0	1	6	8	3	5	7	2	4	9
19	19	18	13	11	16	14	12	17	15	10

③

-	4	9	6	0	3	1	7	8	5	2
13	9	4	7	13	10	12	6	5	8	11

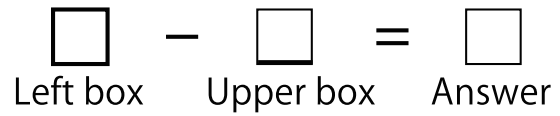
④

-	1	6	2	8	9	5	7	4	0	3
17	16	11	15	9	8	12	10	13	17	14

⑤

-	6	7	2	8	0	5	4	9	1	3
16	10	9	14	8	16	11	12	7	15	13

Complete the Subtraction Boxes.



①

-	8	6	9	5	2	1	3	4	0	7
12	4	6	3	7	10	11	9	8	12	5

②

-	3	4	1	2	9	5	7	0	6	8
14	11	10	13	12	5	9	7	14	8	6

③

-	1	0	2	5	9	3	4	6	7	8
19	18	19	17	14	10	16	15	13	12	11

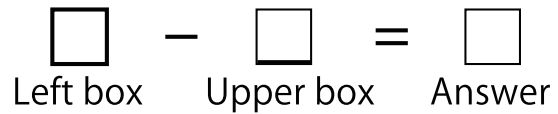
④

-	4	6	5	9	7	8	2	3	1	0
18	14	12	13	9	11	10	16	15	17	18

⑤

-	0	6	2	7	5	4	3	8	1	9
13	13	7	11	6	8	9	10	5	12	4

Complete the Subtraction Boxes.



①

-	1	6	2	5	7	9	4	0	8	3
14	13	8	12	9	7	5	10	14	6	11

②

-	3	9	5	2	4	7	6	8	0	1
19	16	10	14	17	15	12	13	11	19	18

③

-	3	5	7	9	4	2	1	8	6	0
15	12	10	8	6	11	13	14	7	9	15

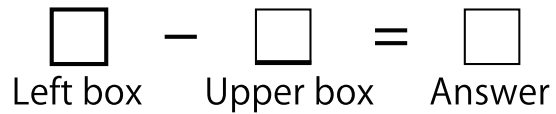
④

-	3	1	5	0	8	2	7	4	9	6
12	9	11	7	12	4	10	5	8	3	6

⑤

-	8	3	6	1	4	9	2	7	0	5
16	8	13	10	15	12	7	14	9	16	11

Complete the Subtraction Boxes.



①

-	7	5	8	3	4	9	1	2	6	0
15	8	10	7	12	11	6	14	13	9	15

②

-	5	9	3	0	6	4	8	2	1	7
12	7	3	9	12	6	8	4	10	11	5

③

-	7	2	1	8	3	6	5	4	0	9
19	12	17	18	11	16	13	14	15	19	10

④

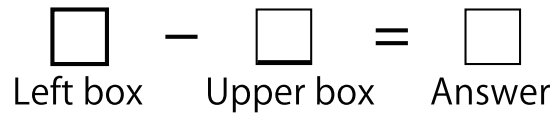
-	1	9	3	7	5	0	2	6	8	4
14	13	5	11	7	9	14	12	8	6	10

⑤

-	9	5	6	2	1	0	8	4	7	3
18	9	13	12	16	17	18	10	14	11	15



Complete the Subtraction Boxes.



①

-	8	3	2	0	9	4	6	1	5	7
13	5	10	11	13	4	9	7	12	8	6

②

-	9	3	8	6	4	0	2	1	5	7
19	10	16	11	13	15	19	17	18	14	12

③

-	6	9	5	4	1	7	8	3	0	2
16	10	7	11	12	15	9	8	13	16	14

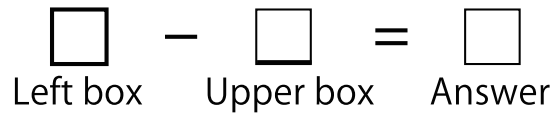
④

-	4	1	8	5	9	0	3	6	7	2
12	8	11	4	7	3	12	9	6	5	10

⑤

-	7	2	6	3	5	8	0	4	9	1
14	7	12	8	11	9	6	14	10	5	13

Complete the Subtraction Boxes.



①

-	9	4	1	0	5	8	3	7	6	2
12	3	8	11	12	7	4	9	5	6	10

②

-	0	1	6	9	8	3	4	2	5	7
18	18	17	12	9	10	15	14	16	13	11

③

-	9	1	7	8	0	4	3	2	5	6
13	4	12	6	5	13	9	10	11	8	7

④

-	9	3	4	6	2	1	7	0	8	5
19	10	16	15	13	17	18	12	19	11	14

⑤

-	1	0	7	5	4	9	3	8	2	6
15	14	15	8	10	11	6	12	7	13	9

Complete the Subtraction Boxes.

$$\square - \square = \square$$

Left box      Upper box      Answer

①

-	8	1	5	0	6	2	4	9	7	3
17	9	16	12	17	11	15	13	8	10	14

②

-	9	0	7	4	2	8	6	5	1	3
16	7	16	9	12	14	8	10	11	15	13

③

-	0	9	2	6	3	1	7	8	4	5
14	14	5	12	8	11	13	7	6	10	9

④

-	2	3	9	1	4	6	0	7	8	5
15	13	12	6	14	11	9	15	8	7	10

⑤

-	7	9	8	1	3	0	6	4	2	5
19	12	10	11	18	16	19	13	15	17	14

Complete the Subtraction Boxes.

$$\square - \square = \square$$

Left box      Upper box      Answer

①

-	6	5	3	4	8	1	0	9	7	2
11	5	6	8	7	3	10	11	2	4	9

②

-	3	7	4	9	5	1	8	6	2	0
19	16	12	15	10	14	18	11	13	17	19

③

-	6	0	9	2	3	4	1	7	5	8
16	10	16	7	14	13	12	15	9	11	8

④

-	2	9	5	6	8	1	4	0	7	3
18	16	9	13	12	10	17	14	18	11	15

⑤

-	9	0	7	5	4	8	2	1	3	6
13	4	13	6	8	9	5	11	12	10	7