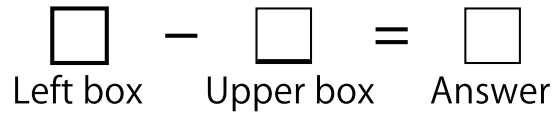


Complete the Subtraction Boxes.



①

-	7	5	1	6	0	2	4	8	9	3
16										

②

-	3	2	0	7	9	5	8	1	4	6
15										

③

-	4	2	7	5	6	1	8	0	9	3
13										

④

-	4	9	0	5	8	3	2	1	6	7
17										

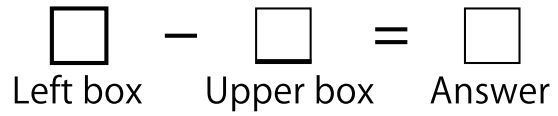
⑤

-	2	3	8	0	6	5	7	1	9	4
14										

Note

Score

Complete the Subtraction Boxes.



①

-	5	1	6	0	3	7	4	9	2	8
16										

②

-	5	2	1	0	8	3	4	9	6	7
19										

③

-	1	8	3	9	5	7	2	0	6	4
18										

④

-	9	1	5	7	2	4	8	0	3	6
11										

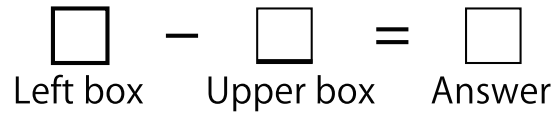
⑤

-	2	9	7	3	5	0	1	6	8	4
12										

Note

Score

Complete the Subtraction Boxes.



①

-	8	3	2	5	9	6	7	4	0	1
13										

②

-	7	1	8	3	6	2	4	5	0	9
18										

③

-	7	1	2	4	5	6	8	9	0	3
16										

④

-	7	9	8	2	3	5	0	4	1	6
14										

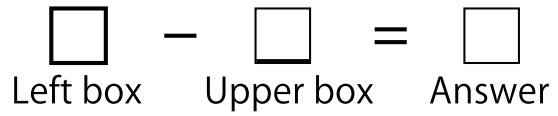
⑤

-	6	4	7	3	9	8	5	1	2	0
12										

Note

Score

Complete the Subtraction Boxes.



①

-	7	9	8	3	0	1	6	2	4	5
18										

②

-	8	9	7	3	1	4	2	6	0	5
19										

③

-	9	1	0	5	4	2	6	3	7	8
12										

④

-	3	9	5	8	4	0	6	2	1	7
11										

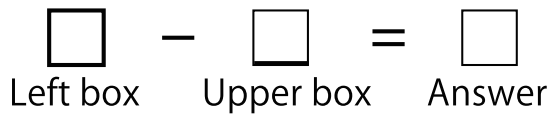
⑤

-	9	7	8	1	3	5	4	0	6	2
14										

Note

Score

Complete the Subtraction Boxes.



①

-	5	0	6	8	2	3	7	4	9	1
15										

②

-	9	4	3	6	1	7	8	2	5	0
19										

③

-	7	2	8	5	6	0	3	4	9	1
11										

④

-	6	4	1	5	9	2	8	7	0	3
14										

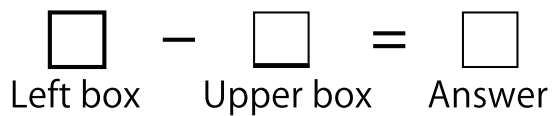
⑤

-	0	5	8	7	3	4	6	1	2	9
17										

Note

Score

Complete the Subtraction Boxes.



①

-	7	0	4	1	6	3	8	2	5	9
19										

②

-	4	8	7	9	3	5	2	1	0	6
11										

③

-	7	1	9	4	8	5	2	6	3	0
16										

④

-	8	1	5	6	0	9	2	3	4	7
14										

⑤

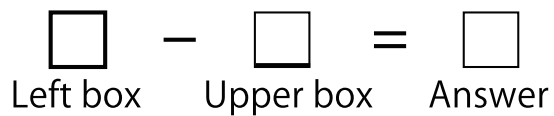
-	1	5	8	7	0	2	6	4	3	9
15										

Note

Score



Complete the Subtraction Boxes.



①

-	6	0	2	4	3	1	7	8	5	9
18										

②

-	0	7	6	8	4	9	3	1	2	5
14										

③

-	8	7	9	6	1	4	2	3	5	0
15										

④

-	8	6	9	7	2	0	1	5	3	4
19										

⑤


-	4	1	0	8	2	7	3	5	6	9
11										

Note

Score



Complete the Subtraction Boxes.



①

-	4	2	5	1	9	3	7	0	6	8
17										

②

-	6	0	4	1	9	3	7	2	8	5
14										

③

-	3	2	7	6	0	8	9	4	5	1
18										

④

-	2	6	7	9	4	1	8	3	5	0
16										


⑤

-	0	5	9	4	8	7	6	2	1	3
12										

Note

Score

Complete the Subtraction Boxes.



①

-	0	1	2	3	4	9	5	8	6	7
19										

②

-	0	5	3	7	1	4	2	8	6	9
16										

③

-	4	5	1	9	0	6	2	8	7	3
18										

④

-	0	3	4	6	1	5	8	7	2	9
15										

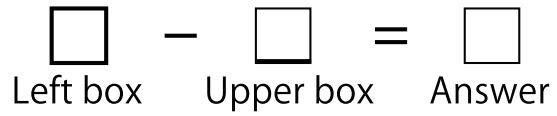
⑤

-	1	9	4	5	0	8	2	6	3	7
14										

Note

Score

Complete the Subtraction Boxes.



①

-	6	8	1	0	2	9	5	7	4	3
17										

②

-	4	7	5	6	0	8	2	3	9	1
15										

③

-	9	4	1	2	8	7	6	3	0	5
16										

④

-	8	0	7	1	4	2	6	3	9	5
14										

⑤

-	4	6	5	9	1	2	0	8	7	3
11										

Note

Score



Complete the Subtraction Boxes.

$$\square - \square = \square$$

Left box Upper box Answer

①

-	7	5	1	6	0	2	4	8	9	3
16	9	11	15	10	16	14	12	8	7	13

②

-	3	2	0	7	9	5	8	1	4	6
15	12	13	15	8	6	10	7	14	11	9

③

-	4	2	7	5	6	1	8	0	9	3
13	9	11	6	8	7	12	5	13	4	10

④

-	4	9	0	5	8	3	2	1	6	7
17	13	8	17	12	9	14	15	16	11	10

⑤

-	2	3	8	0	6	5	7	1	9	4
14	12	11	6	14	8	9	7	13	5	10

Complete the Subtraction Boxes.

$$\square - \square = \square$$

Left box Upper box Answer

①

-	5	1	6	0	3	7	4	9	2	8
16	11	15	10	16	13	9	12	7	14	8

②

-	5	2	1	0	8	3	4	9	6	7
19	14	17	18	19	11	16	15	10	13	12

③

-	1	8	3	9	5	7	2	0	6	4
18	17	10	15	9	13	11	16	18	12	14

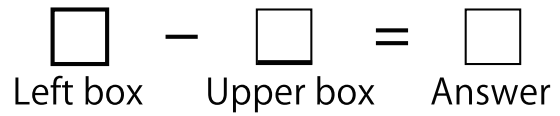
④

-	9	1	5	7	2	4	8	0	3	6
11	2	10	6	4	9	7	3	11	8	5

⑤

-	2	9	7	3	5	0	1	6	8	4
12	10	3	5	9	7	12	11	6	4	8

Complete the Subtraction Boxes.



①

-	8	3	2	5	9	6	7	4	0	1
13	5	10	11	8	4	7	6	9	13	12

②

-	7	1	8	3	6	2	4	5	0	9
18	11	17	10	15	12	16	14	13	18	9

③

-	7	1	2	4	5	6	8	9	0	3
16	9	15	14	12	11	10	8	7	16	13

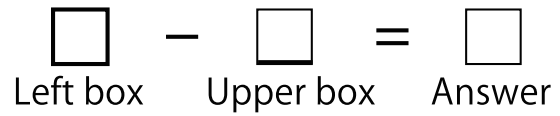
④

-	7	9	8	2	3	5	0	4	1	6
14	7	5	6	12	11	9	14	10	13	8

⑤

-	6	4	7	3	9	8	5	1	2	0
12	6	8	5	9	3	4	7	11	10	12

Complete the Subtraction Boxes.



①

-	7	9	8	3	0	1	6	2	4	5
18	11	9	10	15	18	17	12	16	14	13

②

-	8	9	7	3	1	4	2	6	0	5
19	11	10	12	16	18	15	17	13	19	14

③

-	9	1	0	5	4	2	6	3	7	8
12	3	11	12	7	8	10	6	9	5	4

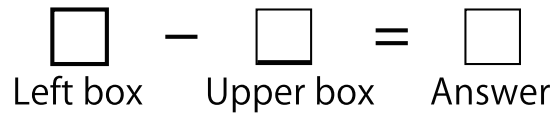
④

-	3	9	5	8	4	0	6	2	1	7
11	8	2	6	3	7	11	5	9	10	4

⑤

-	9	7	8	1	3	5	4	0	6	2
14	5	7	6	13	11	9	10	14	8	12

Complete the Subtraction Boxes.



①

-	5	0	6	8	2	3	7	4	9	1
15	10	15	9	7	13	12	8	11	6	14

②

-	9	4	3	6	1	7	8	2	5	0
19	10	15	16	13	18	12	11	17	14	19

③

-	7	2	8	5	6	0	3	4	9	1
11	4	9	3	6	5	11	8	7	2	10

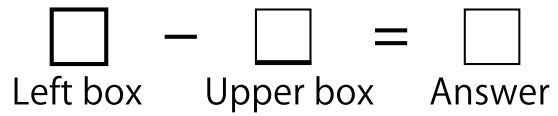
④

-	6	4	1	5	9	2	8	7	0	3
14	8	10	13	9	5	12	6	7	14	11

⑤

-	0	5	8	7	3	4	6	1	2	9
17	17	12	9	10	14	13	11	16	15	8

Complete the Subtraction Boxes.



①

-	7	0	4	1	6	3	8	2	5	9
19	12	19	15	18	13	16	11	17	14	10

②

-	4	8	7	9	3	5	2	1	0	6
11	7	3	4	2	8	6	9	10	11	5

③

-	7	1	9	4	8	5	2	6	3	0
16	9	15	7	12	8	11	14	10	13	16

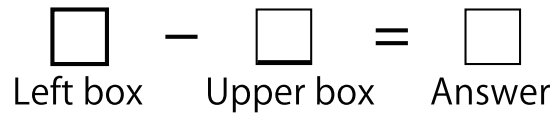
④

-	8	1	5	6	0	9	2	3	4	7
14	6	13	9	8	14	5	12	11	10	7

⑤

-	1	5	8	7	0	2	6	4	3	9
15	14	10	7	8	15	13	9	11	12	6

Complete the Subtraction Boxes.



①

-	6	0	2	4	3	1	7	8	5	9
18	12	18	16	14	15	17	11	10	13	9

②

-	0	7	6	8	4	9	3	1	2	5
14	14	7	8	6	10	5	11	13	12	9

③

-	8	7	9	6	1	4	2	3	5	0
15	7	8	6	9	14	11	13	12	10	15

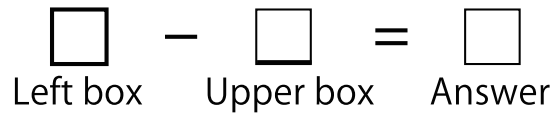
④

-	8	6	9	7	2	0	1	5	3	4
19	11	13	10	12	17	19	18	14	16	15

⑤

-	4	1	0	8	2	7	3	5	6	9
11	7	10	11	3	9	4	8	6	5	2

Complete the Subtraction Boxes.



①

-	4	2	5	1	9	3	7	0	6	8
17	13	15	12	16	8	14	10	17	11	9

②

-	6	0	4	1	9	3	7	2	8	5
14	8	14	10	13	5	11	7	12	6	9

③

-	3	2	7	6	0	8	9	4	5	1
18	15	16	11	12	18	10	9	14	13	17

④

-	2	6	7	9	4	1	8	3	5	0
16	14	10	9	7	12	15	8	13	11	16

⑤

-	0	5	9	4	8	7	6	2	1	3
12	12	7	3	8	4	5	6	10	11	9

Complete the Subtraction Boxes.

$$\square - \square = \square$$

Left box Upper box Answer

①

-	0	1	2	3	4	9	5	8	6	7
19	19	18	17	16	15	10	14	11	13	12

②

-	0	5	3	7	1	4	2	8	6	9
16	16	11	13	9	15	12	14	8	10	7

③

-	4	5	1	9	0	6	2	8	7	3
18	14	13	17	9	18	12	16	10	11	15

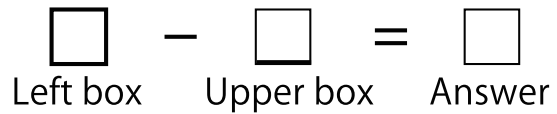
④

-	0	3	4	6	1	5	8	7	2	9
15	15	12	11	9	14	10	7	8	13	6

⑤

-	1	9	4	5	0	8	2	6	3	7
14	13	5	10	9	14	6	12	8	11	7

Complete the Subtraction Boxes.



①

-	6	8	1	0	2	9	5	7	4	3
17	11	9	16	17	15	8	12	10	13	14

②

-	4	7	5	6	0	8	2	3	9	1
15	11	8	10	9	15	7	13	12	6	14

③

-	9	4	1	2	8	7	6	3	0	5
16	7	12	15	14	8	9	10	13	16	11

④

-	8	0	7	1	4	2	6	3	9	5
14	6	14	7	13	10	12	8	11	5	9

⑤

-	4	6	5	9	1	2	0	8	7	3
11	7	5	6	2	10	9	11	3	4	8