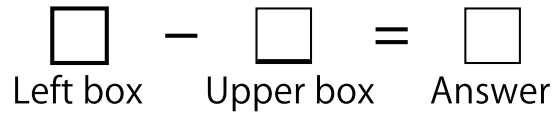


Complete the Subtraction Boxes.



①

-	2	1	0	3	6	8	7	9	5	4
15										

②

-	7	5	4	1	9	6	3	2	0	8
12										

③

-	3	7	9	2	0	8	6	4	1	5
14										

④

-	3	7	9	5	2	1	0	8	6	4
13										

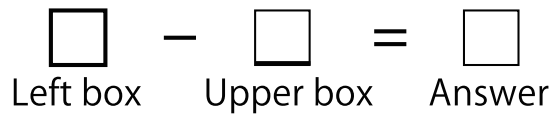
⑤

-	3	5	1	0	9	8	6	4	2	7
11										

Note

Score

Complete the Subtraction Boxes.



①

-	0	8	3	4	2	6	1	7	5	9
18										

②

-	6	9	3	5	7	0	1	2	4	8
12										

③

-	9	2	6	5	3	4	8	7	0	1
19										

④

-	6	8	2	0	4	3	1	7	5	9
17										

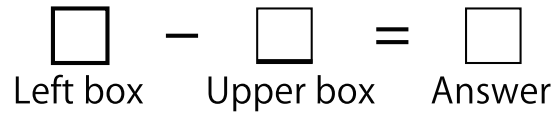
⑤

-	0	3	6	8	1	7	4	2	9	5
13										

Note _____

Score _____

Complete the Subtraction Boxes.



①

-	9	6	0	5	3	2	4	1	8	7
17										

②

-	8	6	0	3	4	1	5	9	7	2
11										

③

-	7	1	0	9	4	5	6	2	3	8
14										

④

-	9	2	6	1	4	7	8	3	0	5
15										

⑤

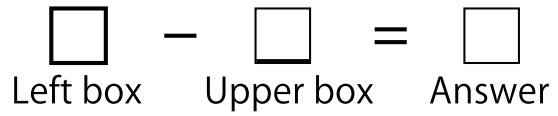
-	2	5	1	4	8	9	6	3	7	0
16										

Note

Score



Complete the Subtraction Boxes.



①

-	3	4	8	6	7	0	9	1	2	5
17										

②

-	4	2	0	3	7	8	6	9	1	5
11										

③

-	6	2	3	9	5	7	8	4	0	1
14										

④

-	4	3	0	2	5	9	7	1	8	6
19										

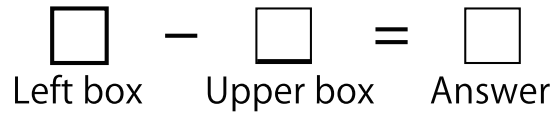
⑤

-	8	7	2	6	9	5	4	0	1	3
12										

Note

Score

Complete the Subtraction Boxes.



①

-	0	7	1	4	8	5	6	3	9	2
14										

②

-	2	5	3	9	1	7	0	6	4	8
19										

③

-	2	1	6	4	0	8	7	3	5	9
16										

④

-	7	4	1	8	9	0	2	5	3	6
12										

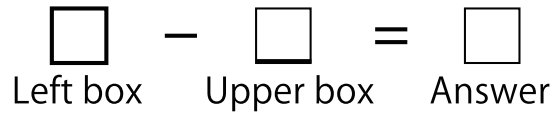
⑤

-	1	0	2	5	3	8	7	9	4	6
11										

Note

Score

Complete the Subtraction Boxes.



①

-	9	1	8	3	4	0	5	6	7	2
13										

②

-	0	5	8	2	3	1	9	4	6	7
14										

③

-	8	7	2	9	5	4	1	6	3	0
12										

④

-	6	4	5	1	7	2	8	0	9	3
17										


⑤

-	2	0	3	5	4	1	9	7	8	6
11										

Note

Score

Complete the Subtraction Boxes.



①

-	3	2	6	0	8	7	5	4	1	9
11										

②

-	7	9	2	6	4	1	8	3	5	0
19										

③

-	4	5	3	7	9	6	2	8	1	0
12										

④

-	6	5	8	4	1	9	2	0	7	3
14										


⑤

-	6	1	9	8	2	3	7	0	5	4
16										

Note

Score

Complete the Subtraction Boxes.



①

-	1	2	4	5	6	0	7	8	3	9
18										

②

-	1	4	6	2	7	5	3	0	9	8
14										

③

-	0	5	8	1	4	6	7	3	9	2
15										

④

-	8	5	6	3	4	0	1	7	9	2
13										

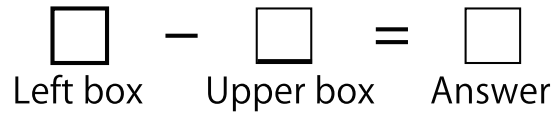
⑤

-	8	5	2	7	1	3	0	6	9	4
11										

Note

Score

Complete the Subtraction Boxes.



①

-	3	2	0	7	6	4	5	8	1	9
16										

②

-	8	6	7	2	5	0	9	3	4	1
19										

③

-	9	1	6	4	3	7	2	5	0	8
15										

④

-	1	4	2	9	6	0	3	8	5	7
13										

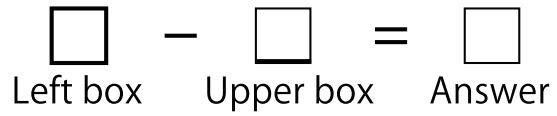
⑤

-	0	3	5	9	8	2	4	6	1	7
17										

Note

Score

Complete the Subtraction Boxes.



①

-	8	4	3	2	5	1	6	7	0	9
13										

②

-	3	7	6	1	0	4	8	5	9	2
18										

③

-	7	1	0	9	4	5	2	8	3	6
19										

④

-	8	5	4	6	7	1	2	3	0	9
15										

⑤

-	2	3	8	5	6	9	1	7	0	4
11										

Note

Score

Complete the Subtraction Boxes.

$$\square - \square = \square$$

Left box Upper box Answer

①

-	2	1	0	3	6	8	7	9	5	4
15	13	14	15	12	9	7	8	6	10	11

②

-	7	5	4	1	9	6	3	2	0	8
12	5	7	8	11	3	6	9	10	12	4

③

-	3	7	9	2	0	8	6	4	1	5
14	11	7	5	12	14	6	8	10	13	9

④

-	3	7	9	5	2	1	0	8	6	4
13	10	6	4	8	11	12	13	5	7	9

⑤

-	3	5	1	0	9	8	6	4	2	7
11	8	6	10	11	2	3	5	7	9	4

Complete the Subtraction Boxes.

$$\square - \square = \square$$

Left box Upper box Answer

①

-	0	8	3	4	2	6	1	7	5	9
18	18	10	15	14	16	12	17	11	13	9

②

-	6	9	3	5	7	0	1	2	4	8
12	6	3	9	7	5	12	11	10	8	4

③

-	9	2	6	5	3	4	8	7	0	1
19	10	17	13	14	16	15	11	12	19	18

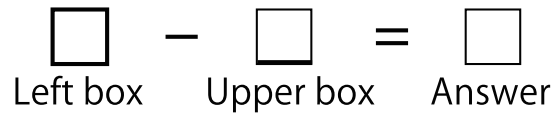
④

-	6	8	2	0	4	3	1	7	5	9
17	11	9	15	17	13	14	16	10	12	8

⑤

-	0	3	6	8	1	7	4	2	9	5
13	13	10	7	5	12	6	9	11	4	8

Complete the Subtraction Boxes.



①

-	9	6	0	5	3	2	4	1	8	7
17	8	11	17	12	14	15	13	16	9	10

②

-	8	6	0	3	4	1	5	9	7	2
11	3	5	11	8	7	10	6	2	4	9

③

-	7	1	0	9	4	5	6	2	3	8
14	7	13	14	5	10	9	8	12	11	6

④

-	9	2	6	1	4	7	8	3	0	5
15	6	13	9	14	11	8	7	12	15	10

⑤

-	2	5	1	4	8	9	6	3	7	0
16	14	11	15	12	8	7	10	13	9	16

Complete the Subtraction Boxes.

$$\square - \square = \square$$

Left box Upper box Answer

①

-	3	4	8	6	7	0	9	1	2	5
17	14	13	9	11	10	17	8	16	15	12

②

-	4	2	0	3	7	8	6	9	1	5
11	7	9	11	8	4	3	5	2	10	6

③

-	6	2	3	9	5	7	8	4	0	1
14	8	12	11	5	9	7	6	10	14	13

④

-	4	3	0	2	5	9	7	1	8	6
19	15	16	19	17	14	10	12	18	11	13

⑤

-	8	7	2	6	9	5	4	0	1	3
12	4	5	10	6	3	7	8	12	11	9

Complete the Subtraction Boxes.

$$\square - \square = \square$$

Left box Upper box Answer

①

-	0	7	1	4	8	5	6	3	9	2
14	14	7	13	10	6	9	8	11	5	12

②

-	2	5	3	9	1	7	0	6	4	8
19	17	14	16	10	18	12	19	13	15	11

③

-	2	1	6	4	0	8	7	3	5	9
16	14	15	10	12	16	8	9	13	11	7


④

-	7	4	1	8	9	0	2	5	3	6
12	5	8	11	4	3	12	10	7	9	6

⑤

-	1	0	2	5	3	8	7	9	4	6
11	10	11	9	6	8	3	4	2	7	5

Complete the Subtraction Boxes.



①

-	9	1	8	3	4	0	5	6	7	2
13	4	12	5	10	9	13	8	7	6	11

②

-	0	5	8	2	3	1	9	4	6	7
14	14	9	6	12	11	13	5	10	8	7

③

-	8	7	2	9	5	4	1	6	3	0
12	4	5	10	3	7	8	11	6	9	12

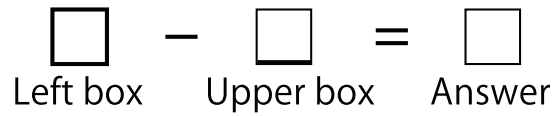
④

-	6	4	5	1	7	2	8	0	9	3
17	11	13	12	16	10	15	9	17	8	14

⑤

-	2	0	3	5	4	1	9	7	8	6
11	9	11	8	6	7	10	2	4	3	5

Complete the Subtraction Boxes.



①

-	3	2	6	0	8	7	5	4	1	9
11	8	9	5	11	3	4	6	7	10	2

②

-	7	9	2	6	4	1	8	3	5	0
19	12	10	17	13	15	18	11	16	14	19

③

-	4	5	3	7	9	6	2	8	1	0
12	8	7	9	5	3	6	10	4	11	12

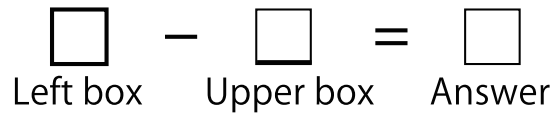
④

-	6	5	8	4	1	9	2	0	7	3
14	8	9	6	10	13	5	12	14	7	11

⑤

-	6	1	9	8	2	3	7	0	5	4
16	10	15	7	8	14	13	9	16	11	12

Complete the Subtraction Boxes.



①

-	1	2	4	5	6	0	7	8	3	9
18	17	16	14	13	12	18	11	10	15	9

②

-	1	4	6	2	7	5	3	0	9	8
14	13	10	8	12	7	9	11	14	5	6

③

-	0	5	8	1	4	6	7	3	9	2
15	15	10	7	14	11	9	8	12	6	13

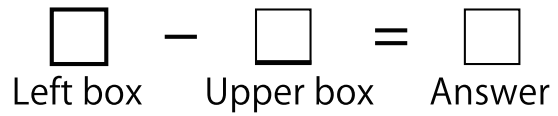
④

-	8	5	6	3	4	0	1	7	9	2
13	5	8	7	10	9	13	12	6	4	11

⑤

-	8	5	2	7	1	3	0	6	9	4
11	3	6	9	4	10	8	11	5	2	7

Complete the Subtraction Boxes.



①

-	3	2	0	7	6	4	5	8	1	9
16	13	14	16	9	10	12	11	8	15	7

②

-	8	6	7	2	5	0	9	3	4	1
19	11	13	12	17	14	19	10	16	15	18

③

-	9	1	6	4	3	7	2	5	0	8
15	6	14	9	11	12	8	13	10	15	7

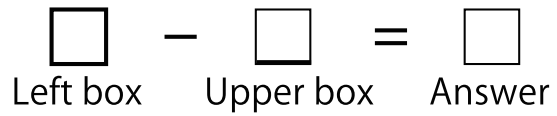
④

-	1	4	2	9	6	0	3	8	5	7
13	12	9	11	4	7	13	10	5	8	6

⑤

-	0	3	5	9	8	2	4	6	1	7
17	17	14	12	8	9	15	13	11	16	10

Complete the Subtraction Boxes.



①

-	8	4	3	2	5	1	6	7	0	9
13	5	9	10	11	8	12	7	6	13	4

②

-	3	7	6	1	0	4	8	5	9	2
18	15	11	12	17	18	14	10	13	9	16

③

-	7	1	0	9	4	5	2	8	3	6
19	12	18	19	10	15	14	17	11	16	13

④

-	8	5	4	6	7	1	2	3	0	9
15	7	10	11	9	8	14	13	12	15	6

⑤

-	2	3	8	5	6	9	1	7	0	4
11	9	8	3	6	5	2	10	4	11	7