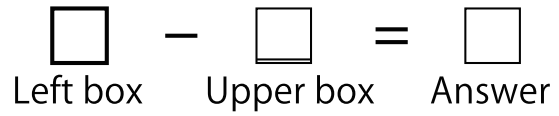


Complete the Subtraction Boxes.



-	3	2	5	8	1	6	7	9	4
9									

-	3	5	8	7	4	6	1	2
8								

-	2	4	6	7	1	3	5
7							

-	5	1	6	2	3	4
6						

-	4	2	5	1	3
5					

-	1	2	3	4
4				

-	1	2	3
3			


-	2	1
2		

-	1
1	

Note _____

Score _____

Complete the Subtraction Boxes.



-	9	1	8	7	6	3	2	5	4
9									

-	1	5	4	3	2	6	7	8
8								

-	1	2	6	5	4	7	3
7							

-	4	3	6	5	1	2
6						

-	1	3	5	2	4
5					

-	2	1	3	4
4				

-	3	1	2
3			


-	1	2
2		

-	1
1	

Note _____

Score _____

Complete the Subtraction Boxes.



-	4	8	6	7	2	5	1	9	3
9									

-	1	7	5	2	8	4	3	6
8								

-	2	3	1	4	5	7	6
7							

-	5	2	3	4	6	1
6						

-	1	3	5	4	2
5					

-	1	2	3	4
4				

-	3	1	2
3			

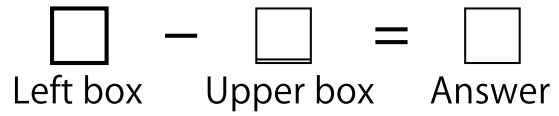
-	2	1
2		

-	1
1	

Note _____

Score _____

Complete the Subtraction Boxes.



-	6	5	4	8	1	7	9	3	2
9									

-	1	6	4	3	8	2	7	5
8								

-	2	6	5	7	3	4	1
7							

-	6	2	1	5	3	4
6						

-	1	3	5	4	2
5					

-	4	1	2	3
4				

-	3	1	2
3			


-	2	1
2		

-	1
1	

Note _____

Score _____

Complete the Subtraction Boxes.



-	5	8	1	4	7	6	9	3	2
9									

-	6	1	8	4	2	3	5	7
8								

-	6	5	3	7	2	1	4
7							

-	4	6	1	2	5	3
6						

-	5	3	2	1	4
5					

-	4	1	2	3
4				

-	2	1	3
3			


-	1	2
2		

-	1
1	

Note _____

Score _____

Complete the Subtraction Boxes.



-	1	4	3	2	9	7	8	6	5
9									

-	6	1	5	2	4	7	8	3
8								

-	3	2	5	1	7	6	4
7							

-	3	4	5	6	2	1
6						

-	1	3	2	5	4
5					

-	2	1	3	4
4				

-	2	1	3
3			

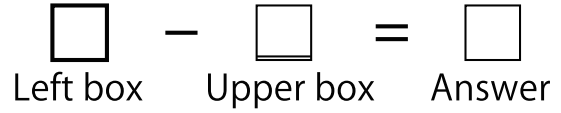
-	2	1
2		

-	1
1	

Note _____

Score _____

Complete the Subtraction Boxes.



-	8	7	4	1	2	3	5	6	9
9									

-	6	2	8	4	3	5	7	1
8								

-	2	3	6	7	5	4	1
7							

-	1	3	2	5	4	6
6						

-	4	1	2	3	5
5					

-	3	2	1	4
4				

-	1	2	3
3			

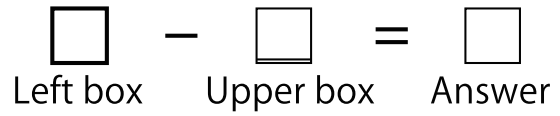
-	2	1
2		

-	1
1	

Note _____

Score _____

Complete the Subtraction Boxes.



-	8	9	3	4	2	5	1	7	6
9									

-	7	5	2	1	6	4	8	3
8								

-	5	1	3	2	6	7	4
7							

-	5	4	1	6	2	3
6						

-	2	1	5	3	4
5					

-	1	4	2	3
4				

-	1	3	2
3			


-	1	2
2		

-	1
1	

Note _____

Score _____

Complete the Subtraction Boxes.



-	6	7	2	3	5	4	8	1	9
9									

-	7	5	8	1	3	2	6	4
8								

-	5	3	7	4	2	1	6
7							

-	1	5	3	2	6	4
6						

-	5	1	3	4	2
5					

-	2	3	4	1
4				

-	3	2	1
3			


-	1	2
2		

-	1
1	

Note _____

Score _____

Complete the Subtraction Boxes.



-	5	3	2	1	7	9	6	4	8
9									

-	4	1	5	3	7	6	2	8
8								

-	3	4	6	5	7	2	1
7							

-	2	6	3	5	4	1
6						

-	1	2	5	3	4
5					

-	3	4	2	1
4				

-	1	2	3
3			


-	1	2
2		

-	1
1	

Note _____

Score _____

Complete the Subtraction Boxes.



-	3	2	5	8	1	6	7	9	4
9	6	7	4	1	8	3	2	0	5

-	3	5	8	7	4	6	1	2
8	5	3	0	1	4	2	7	6

-	2	4	6	7	1	3	5
7	5	3	1	0	6	4	2

-	5	1	6	2	3	4
6	1	5	0	4	3	2

-	4	2	5	1	3
5	1	3	0	4	2

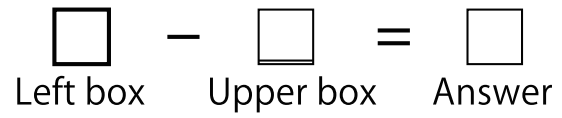
-	1	2	3	4
4	3	2	1	0

-	1	2	3
3	2	1	0

-	2	1
2	0	1

-	1
1	0

Complete the Subtraction Boxes.



-	9	1	8	7	6	3	2	5	4
9	0	8	1	2	3	6	7	4	5

-	1	5	4	3	2	6	7	8
8	7	3	4	5	6	2	1	0

-	1	2	6	5	4	7	3
7	6	5	1	2	3	0	4

-	4	3	6	5	1	2
6	2	3	0	1	5	4

-	1	3	5	2	4
5	4	2	0	3	1

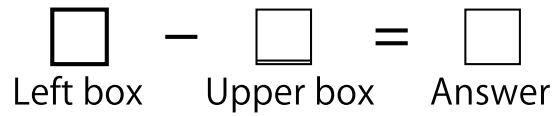
-	2	1	3	4
4	2	3	1	0

-	3	1	2
3	0	2	1

-	1	2
2	1	0

-	1
1	0

Complete the Subtraction Boxes.



-	4	8	6	7	2	5	1	9	3
9	5	1	3	2	7	4	8	0	6

-	1	7	5	2	8	4	3	6
8	7	1	3	6	0	4	5	2

-	2	3	1	4	5	7	6
7	5	4	6	3	2	0	1

-	5	2	3	4	6	1
6	1	4	3	2	0	5

-	1	3	5	4	2
5	4	2	0	1	3

-	1	2	3	4
4	3	2	1	0

-	3	1	2
3	0	2	1

-	2	1
2	0	1

-	1
1	0

Complete the Subtraction Boxes.

$\square - \square = \square$
 Left box Upper box Answer

-	6	5	4	8	1	7	9	3	2
9	3	4	5	1	8	2	0	6	7

-	1	6	4	3	8	2	7	5
8	7	2	4	5	0	6	1	3

-	2	6	5	7	3	4	1
7	5	1	2	0	4	3	6

-	6	2	1	5	3	4
6	0	4	5	1	3	2

-	1	3	5	4	2
5	4	2	0	1	3

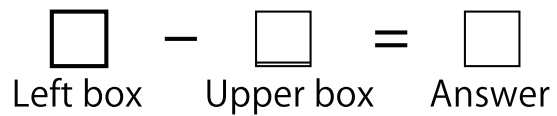
-	4	1	2	3
4	0	3	2	1

-	3	1	2
3	0	2	1

-	2	1
2	0	1

-	1
1	0

Complete the Subtraction Boxes.



-	5	8	1	4	7	6	9	3	2
9	4	1	8	5	2	3	0	6	7

-	6	1	8	4	2	3	5	7
8	2	7	0	4	6	5	3	1

-	6	5	3	7	2	1	4
7	1	2	4	0	5	6	3

-	4	6	1	2	5	3
6	2	0	5	4	1	3

-	5	3	2	1	4
5	0	2	3	4	1

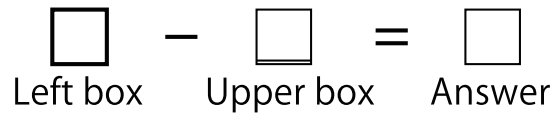
-	4	1	2	3
4	0	3	2	1

-	2	1	3
3	1	2	0

-	1	2
2	1	0

-	1
1	0

Complete the Subtraction Boxes.



-	1	4	3	2	9	7	8	6	5
9	8	5	6	7	0	2	1	3	4

-	6	1	5	2	4	7	8	3
8	2	7	3	6	4	1	0	5

-	3	2	5	1	7	6	4
7	4	5	2	6	0	1	3

-	3	4	5	6	2	1
6	3	2	1	0	4	5

-	1	3	2	5	4
5	4	2	3	0	1

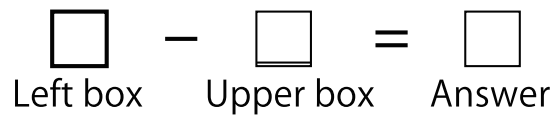
-	2	1	3	4
4	2	3	1	0

-	2	1	3
3	1	2	0

-	2	1
2	0	1

-	1
1	0

Complete the Subtraction Boxes.



-	8	7	4	1	2	3	5	6	9
9	1	2	5	8	7	6	4	3	0

-	6	2	8	4	3	5	7	1
8	2	6	0	4	5	3	1	7

-	2	3	6	7	5	4	1
7	5	4	1	0	2	3	6

-	1	3	2	5	4	6
6	5	3	4	1	2	0

-	4	1	2	3	5
5	1	4	3	2	0

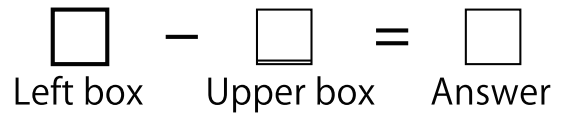
-	3	2	1	4
4	1	2	3	0

-	1	2	3
3	2	1	0

-	2	1
2	0	1

-	1
1	0

Complete the Subtraction Boxes.



-	8	9	3	4	2	5	1	7	6
9	1	0	6	5	7	4	8	2	3

-	7	5	2	1	6	4	8	3
8	1	3	6	7	2	4	0	5

-	5	1	3	2	6	7	4
7	2	6	4	5	1	0	3

-	5	4	1	6	2	3
6	1	2	5	0	4	3

-	2	1	5	3	4
5	3	4	0	2	1


-	1	4	2	3
4	3	0	2	1

-	1	3	2
3	2	0	1

-	1	2
2	1	0

-	1
1	0

Complete the Subtraction Boxes.



-	6	7	2	3	5	4	8	1	9
9	3	2	7	6	4	5	1	8	0

-	7	5	8	1	3	2	6	4
8	1	3	0	7	5	6	2	4

-	5	3	7	4	2	1	6
7	2	4	0	3	5	6	1

-	1	5	3	2	6	4
6	5	1	3	4	0	2

-	5	1	3	4	2
5	0	4	2	1	3

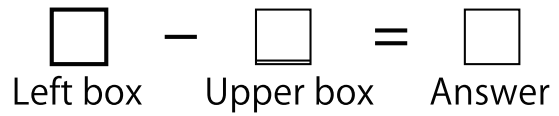
-	2	3	4	1
4	2	1	0	3

-	3	2	1
3	0	1	2

-	1	2
2	1	0

-	1
1	0

Complete the Subtraction Boxes.



-	5	3	2	1	7	9	6	4	8
9	4	6	7	8	2	0	3	5	1

-	4	1	5	3	7	6	2	8
8	4	7	3	5	1	2	6	0

-	3	4	6	5	7	2	1
7	4	3	1	2	0	5	6

-	2	6	3	5	4	1
6	4	0	3	1	2	5

-	1	2	5	3	4
5	4	3	0	2	1

-	3	4	2	1
4	1	0	2	3

-	1	2	3
3	2	1	0

-	1	2
2	1	0

-	1
1	0