



Fill in the missing number to make these add up to 10.

  ...



   ...

   ...

   ...

  ...

   ...

  ...

   ...

  ...

Note _____

Score _____

Making 10 [3]

6 oranges, a grey box, ..., 4

3 oranges, a grey box, 1 dashed orange, ..., 7

1 orange, a grey box, 3 dashed oranges, ..., 9

5 oranges, a grey box, 1 dashed orange, ..., 5

9 oranges, a grey box with 1 dashed orange, ..., 1

2 oranges, a grey box, 1 dashed orange, ..., 8

8 oranges, a grey box, ..., 2

4 oranges, a grey box, 1 dashed orange, ..., 6

7 oranges, a grey box, ..., 3